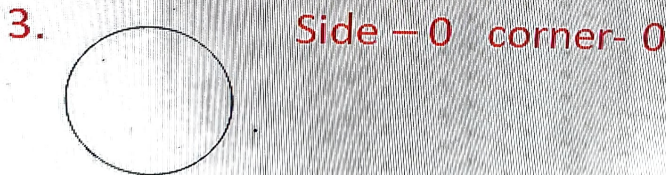
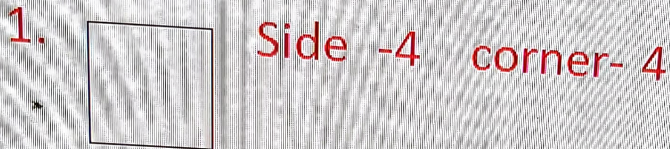


Q- Write the number of sides and corner of following shapes.



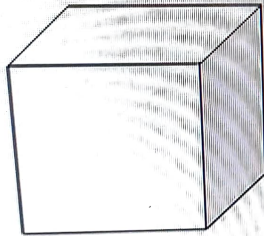
4.



Side- 3 corner- 3


Q – Write the number of faces, edges and vertices of the following shapes.

1.

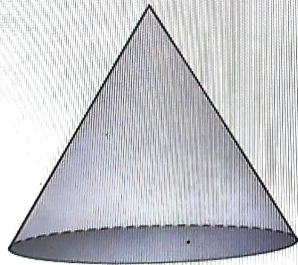


Faces – 6 edges- 8 vertices- 12

2. Face - 6    edges- 8    vertices -12




3. Face -2    edges- 1    vertices - 1



4. Faces -1    edges - 0    vertices - 0

3. Face -2 edges -1 vertices -1



4. Faces -1 edges -0 vertices -0

