





Write the missing numbers on the dial.



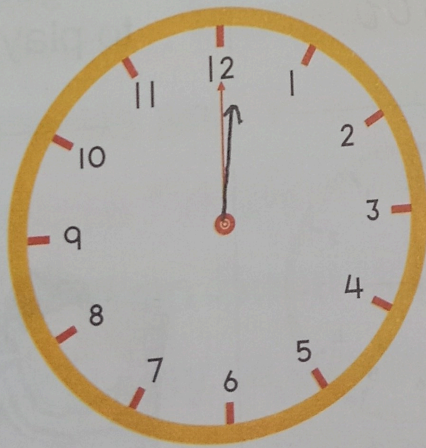
Draw the hour hand to match the time.



7 O'clock




4 O'clock



12 O'clock

s know


What does Vaibhav do at different hours of the day? Write the time in two ways.



6 O'clock

Vaibhav gets up at


6.00



8 O'clock

He completes his home work by


8.00



7 O'clock

He gets ready for school by


7.00



5 O'clock

He goes out to play at


5.00



3 O'clock

He comes back from school by

3.00



10 O'clock

He goes to bed at

10.00

Calendar

Days of the

MONDAY

TUESDAY

WEDNESDAY

Write the day by

- Sunday
- Thursday
- Monday
- Saturday
- Tuesday

Write 'T' for true and 'F' for false.
• Saturday comes after Friday.
• School remains open on Saturday.
• Wednesday is the day after Tuesday.
• Saturday is the day after Friday.
• Sunday comes after Saturday.

Calendar

Days of the Week: A week has 7 days.

MONDAY

First day

TUESDAY

Second day

WEDNESDAY

Third day

THURSDAY

Fourth day

FRIDAY

Fifth day

SATURDAY

Sixth day

SUNDAY

Seventh day

Write the day between the two days mentioned.

- Sunday Monday Tuesday
- Thursday Friday Saturday
- Monday Tuesday Wednesday
- Saturday Sunday Monday
- Tuesday Wednesday Thursday

Write 'T' for true statements and 'F' for false statements.

- Saturday comes before Friday.
- School remains closed on Sunday.
- Wednesday is the first day of the week.
- Saturday is the seventh day of the week.
- Sunday comes after Saturday.

F
T
F
F
T

Fill in the blanks.

There are 7 days in a week.

Friday comes after Thursday.

Saturday comes before Sunday.

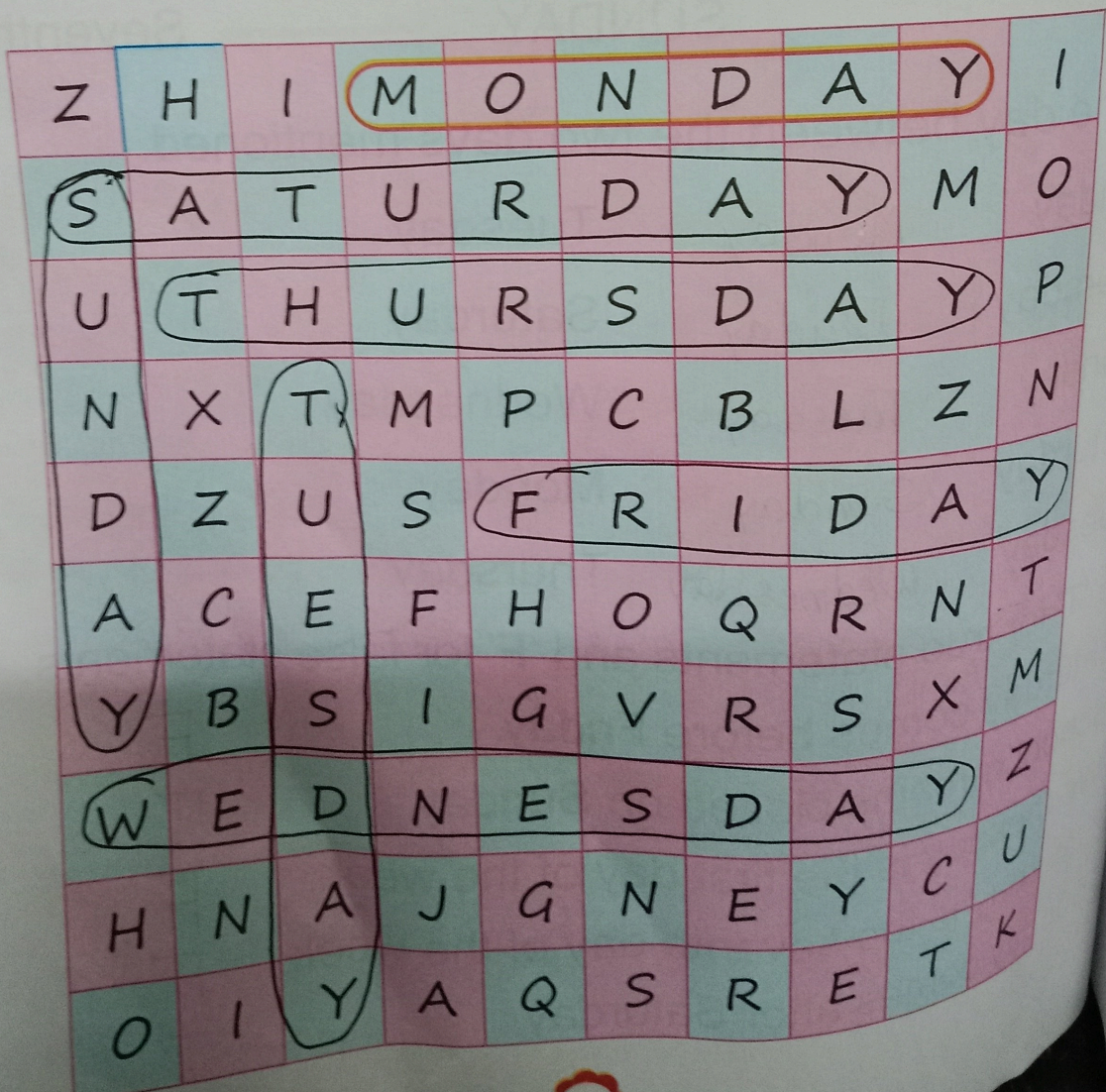
Tuesday is between Monday and Wednesday.

Saturday is the sixth day of the week.

If today is Monday then yesterday was Sunday.

Monday is the first day of the week.

Find the days of the week in the word search.




Observe the pictures and fill in the blanks.
 Ritika is a very studious and decent girl. Apart from studies she keeps herself busy through out the week in different activities.

MONDAY



TUESDAY



WEDNESDAY



THURSDAY



FRIDAY



SATURDAY



SUNDAY




On which day is Ritika

- going for dance?
- learning art and craft?
- preparing for test?
- learning music?
- going for outing?
- going for swimming?

Friday
 Monday
 Sunday
 Wednesday
 Saturday
 Tuesday

Wednesday.
 eek.
 was Sunday.
 eek.
 ord search.



Complete the names of the month.

• AUGUST

• NOVEMBER

• JULY

• FEBRUARY

• DECEMBER

• SEPTEMBER

• MAY

• JUNE

• MARCH

• APRIL

• OCTOBER

• JANUARY

THIRD MONTH

FOURTH MONTH

Name the month in which you celebrate.



New year

January



Teacher's Day

September



Holi

March



Christmas

December



Rakhi

August




Diwali

October

Some months have more or less than 30 days.

In leap year February has 29 days.

January has 31 days.



in the blanks.

There are 12 months in a year.

A leap year has 366 days.

Republic day is celebrated in the month of January.

July is seventh month of the year.

May comes after April.

January comes before February.

February has 29 days in a leap year.

March comes between January and February.

If 2012 is a leap year then the next leap year will be in the year 2016.

I was born in the month of April.

Make your Family Birthday chart. HW

Member	Date	Month	Day
Father			
Mother			
Myself			
Brother/Sister			
Grand father			
Grand mother			

Re
Mon
4
11
18
25
Read th
• How
(a)
• How
(a) 4
• On wh
(a) Th
• What is
(a) Jul
• On whic
(a) Thu
• How man
(a) 7
• What day
(a) Sunda
• What will b
(a) 2

Reading A Calendar

August - 2014

Monday	Tuesday	Wednesday	Thursday	Friday	Saturday	Sunday
				1	2	3
4	5	6	7	8	9	10
11	12	13	14	15	16	17
18	19	20	21	22	23	24
25	26	27	28	29	30	31

Read the calendar and circle the correct answer.

- How many days does this month have?
(a) 30 (b) 31
- How many Sundays are there in this month?
(a) 4 (b) 5
- On which day does 25 August fall?
(a) Thursday (b) Monday
- What is the name of this month?
(a) July (b) August
- On which day does Independence day falls?
(a) Thursday (b) Friday
- How many days are there in the 1st week?
(a) 7 (b) 3
- What day will it be on the last day of the month?
(a) Sunday (b) Friday
- What will be the date on the second Friday of the month?
(a) 2 (b) 8