

Maths (Revision)

WORKSHEET

Q-1. Write table (2 to 15)

Q-2. Write the number of edges, faces and vertices of the following shapes.

1.  _____

2.  _____

3.  _____

4.  _____

5.  _____

Q-3. Solve these following sums.

$$\begin{array}{r} 1. \quad 4 \ . \ 7 \ 4 \\ + 2 \ . \ 3 \ 3 \\ \hline \end{array}$$

$$\begin{array}{r} 2. \ 5 \ . \ 2 \ 3 \\ + 7 \ . \ 8 \ 2 \\ \hline \end{array}$$

$$\begin{array}{r} 1. \quad 4. \quad 7. \quad 4 \\ + 2. \quad 3. \quad 3 \\ \hline \hline \end{array}$$

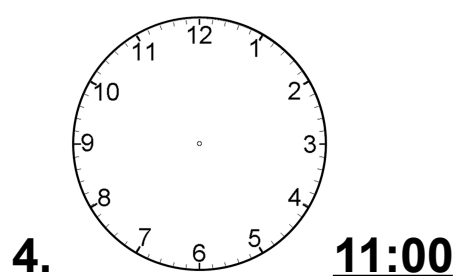
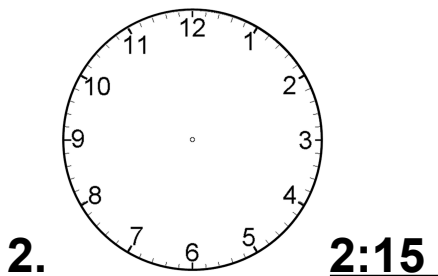
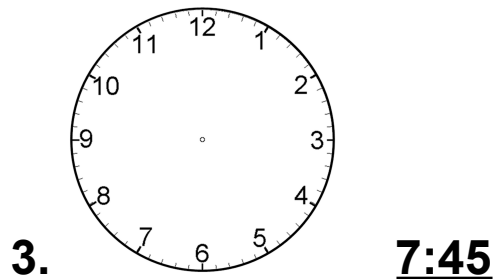
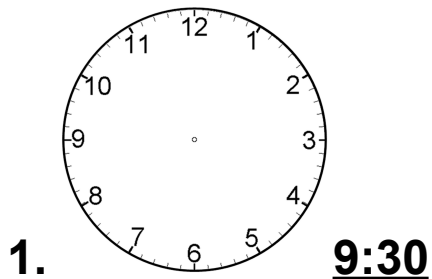
$$\begin{array}{r} 2. \quad 5. \quad 2. \quad 3 \\ + 7. \quad 8. \quad 2 \\ \hline \hline \end{array}$$

$$\begin{array}{r} 3. \quad 7. \quad 7. \quad 9 \\ - 5. \quad 3. \quad 4 \\ \hline \hline \end{array}$$

$$\begin{array}{r} 4. \quad 2. \quad 1. \quad 2 \\ - 2. \quad 0. \quad 1 \\ \hline \hline \end{array}$$

$$\begin{array}{r} 5. \quad 5. \quad 7. \quad 2 \\ - 3. \quad 5. \quad 2 \\ \hline \hline \end{array}$$

Q-4. Write the two hands of the clock.



Q-5. write the time.

1. Quarter past 5 _____

2. 7 o'clock _____

3. Half past 9 _____

4. Quarter to 8 _____

5. 1 o'clock _____

Q-6. Table of 2 to 15.

Q-7. Write the days of the week.

1. Second _____

3. Last _____

2. First _____

4. Fourth _____

5. Fifth _____

5. Third _____

Q-8. write am. Or p.m .

1. I go to school at 7:30 _____

2. I go to bed 10:00 _____

3. I take my breakfast at 7:00 _____

4. I take lunch at 1:30 _____

Q-9. Draw the shapes given below

1. Triangle 2. Rectangle 3. Cube

4. Slanting Line

Q-10 word problem

1. Rishabh bought playing cards for 62 Rs. he gave 80Rs to the shopkeeper. How much money did he get back?

2. Sanya spent Rs. 57 and Aarti Spent Rs. 10 more than her . how much money did they spend altogether.

3. Rohit bought an ice cream for 70 rupees and a Choco Pie for 50 rupees. How much money did he pay to the shopkeeper?