



# Numbers upto 50

Read the counting from 1 to 50.

1	2	3	4	5	6	7	8	9	10
11	12	13	14	15	16	17	18	19	20
21	22	23	24	25	26	27	28	29	30
31	32	33	34	35	36	37	38	39	40
41	42	43	44	45	46	47	48	49	50

Fill in the missing numbers from 21 to 50.

21	22	23	24	25	26	27	28	29	30
----	----	----	----	----	----	----	----	----	----

31	32	33	34	35	36	37	38	39	40
----	----	----	----	----	----	----	----	----	----

41	42	43	44	45	46	47	48	49	50
----	----	----	----	----	----	----	----	----	----

not a single piece left. Jia felt pity for Tanya. She went to her. She gave Tanya half of...

Complete the following series by counting forward.

23 24 25 26 27 28 29 30 31 32 33

39 40 41 42 43 44 45 46 47 48 49

27 28 29 30 31 32 33 34 35 36 37

34 35 36 37 38 39 40 41 42 43 44

40 41 42 43 44 45 46 47 48 49

Complete the following series by counting backward.

50 49 48 47 46 45 44 43 42 41 40

44 43 42 41 40 39 38 37 36 35 34

41 40 39 38 37 36 35 34 33 32 31

31 30 29 28 27 26 25 24 23 22 21


38 37 36 35 34 33 32 31 30 29 28

Count the dots

Numeral


Number name

Circle number




28

Twenty eight



25

Twenty five



24

Twenty Four




30

Thirty




22

Twenty Two




24

Twenty Four




21

Twenty One




26

Twenty Six



29

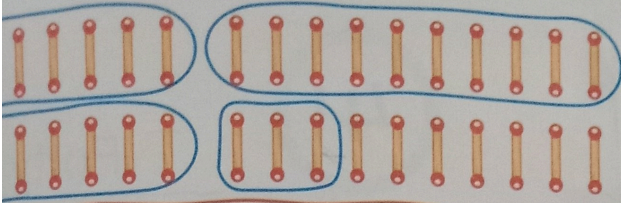
Twenty Nine



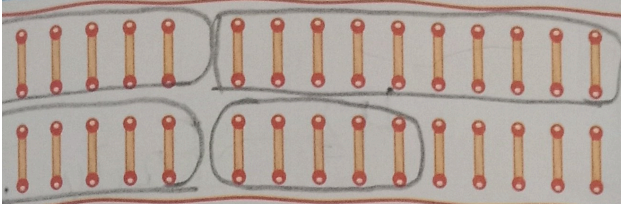
27

Twenty Seven


Names.




33 → 3 tens  
 → 3 ones  
 Thirty three




35 → 3 tens  
 → 5 ones  
 Thirty five




39 → 3 tens  
 → 9 ones  
 Thirty Nine



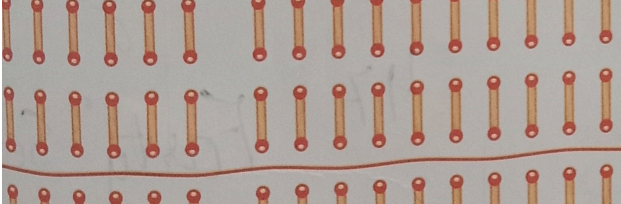
31 → 3 tens  
 → 1 ones  
 Thirty One




40 → 4 tens  
 → 0 ones  
 Forty



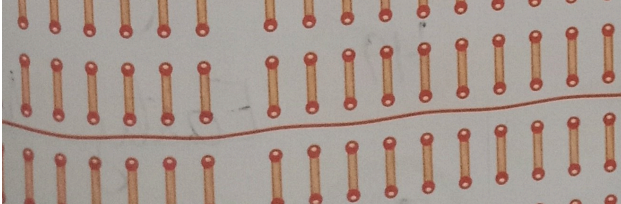
34 → 3 tens  
 → 4 ones  
 Thirty Four




37 → 3 tens  
 → 7 ones  
 Thirty Seven



32 → 3 tens  
 → 2 ones  
 Thirty Two



36 → 3 tens  
 → 6 ones  
 Thirty Six



38 → 3 tens  
 → 8 ones  
 Thirty Eight